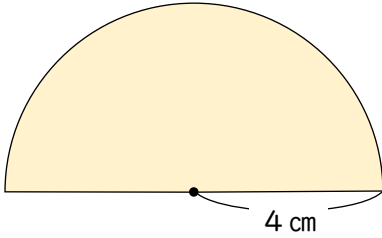


次の図形の色をつけた部分の面積を求めましょう。

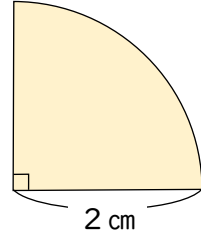
①



式

答え

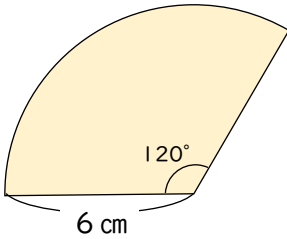
②



式

答え

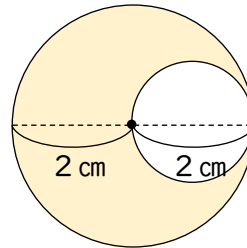
③



式

答え

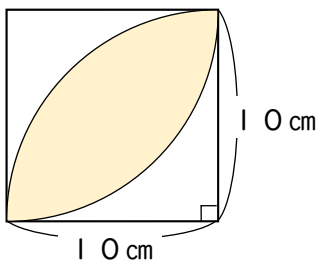
④



式

答え

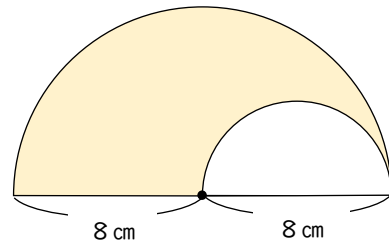
⑤



式

答え

⑥



式

答え

